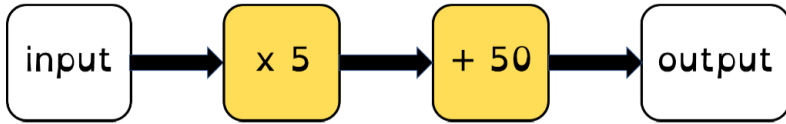
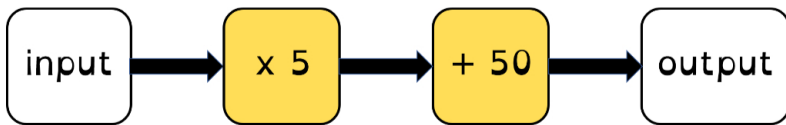


1. Here is a two-step function machine.
If the **input** is **45**, what will the **output** be?



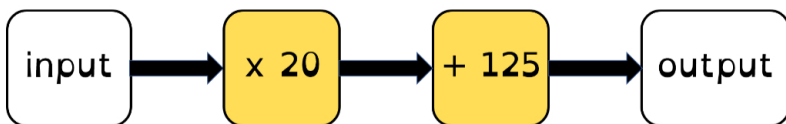
Write your answer in the space below:

2. Here is a two-step function machine.
If the **input** is **0.25**, what will the **output** be?



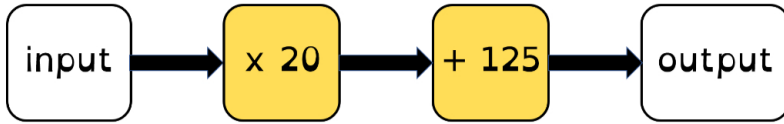
Write your answer in the space below:

3. Here is a two-step function machine.
If the **input** is **35**, what will the **output** be?



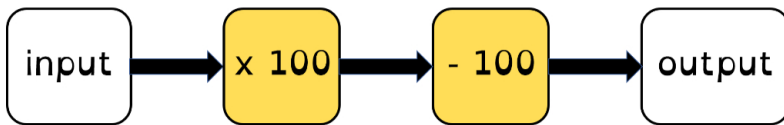
Write your answer in the space below:

4. Here is a two-step function machine.
If the **output** is 525, what will the **input** be?



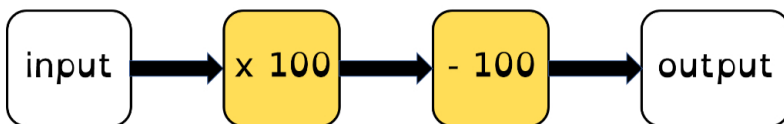
Write your answer in the space below:

5. Here is a two-step function machine.
If the **output** is 800, what will the **input** be?



Write your answer in the space below:

6. Here is a two-step function machine.
If the **output** is 2,400, what will the **input** be?



Write your answer in the space below: